

# 5th Grade Study Guide

First and Last Name: \_\_\_\_\_

1-5. Label the rhythm names of the notes within each measure above each measure:

Whole Note, Half Notes, Quarter Notes, 1 beat of Eighth Notes, 1 beat of Sixteenth Notes

6-10. Label the letter/pitch name of the notes below each measure: D, C, B, A, G

11-15. Fill in the holes on the recorder that you cover to play the note above it

1. \_\_\_\_\_ 2. \_\_\_\_\_ 3. \_\_\_\_\_ 4. \_\_\_\_\_ 5. \_\_\_\_\_

6. \_\_\_\_\_ 7. \_\_\_\_\_ 8. \_\_\_\_\_ 9. \_\_\_\_\_ 10. \_\_\_\_\_

## Notes

Whole notes



Half notes



Quarter notes



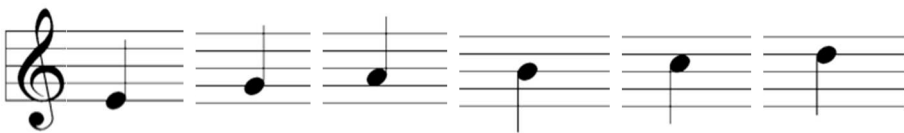
Eighth notes



Sixteenth notes



## Pitches



E

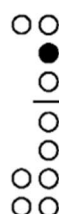
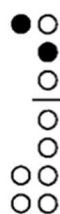
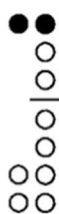
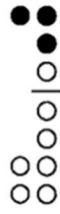
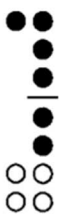
G

A

B

C

D



The information in this box will not be on the quiz!